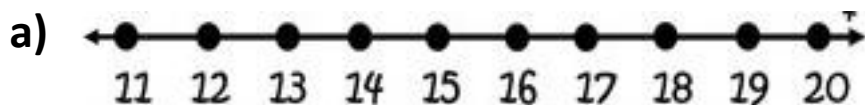
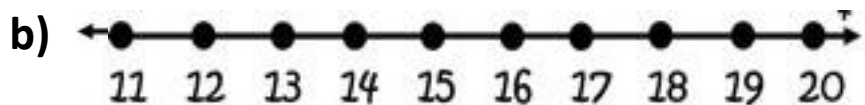




Subtract on the number line (11 – 20)

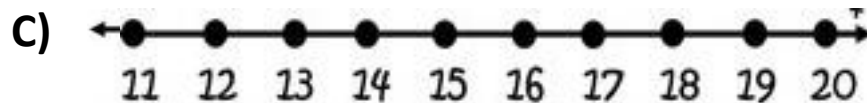


$$\boxed{11} - \boxed{2} = \boxed{\phantom{00}}$$

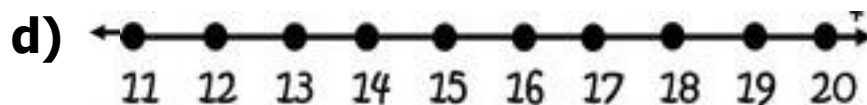


$$\boxed{15} - \boxed{3} = \boxed{\phantom{00}}$$

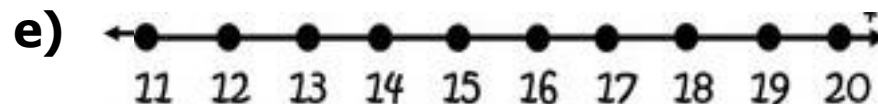
CHECKED BY: ACADEMIC COORDINATOR – CLASS - I  
ISWK/DEPARTMENT OF MATHEMATICS /2023-2024



$$\boxed{18} - \boxed{5} = \boxed{\phantom{00}}$$



$$\boxed{20} - \boxed{4} = \boxed{\phantom{00}}$$



$$\boxed{19} - \boxed{6} = \boxed{\phantom{00}}$$

CHECKED BY: ACADEMIC COORDINATOR – CLASS - I  
ISWK/DEPARTMENT OF MATHEMATICS /2023-2024